
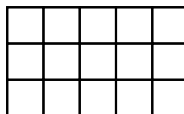


## Area / Perimeter Worksheet

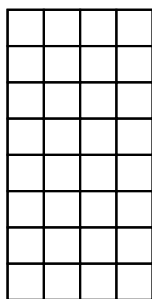
1 a. Draw a rectangle with an area of 40 square units.




1 b. Find the area of this rectangle.




2 a. Find the area of this rectangle.



2 b. Draw a rectangle with an area of 30 square units.



3 a. Draw a rectangle with an area of 56 square units.



3 b. Find the area of this rectangle.

