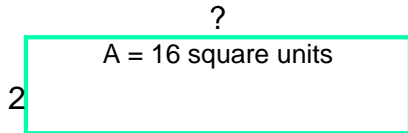
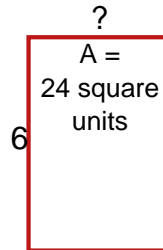


## Area / Perimeter Worksheet

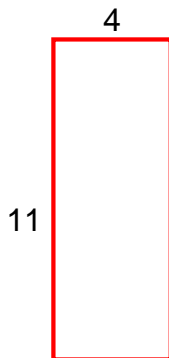
- 1 a. Find the missing side length, when the area is 16 square units.



- 1 b. Find the missing side length, when the area is 24 square units.



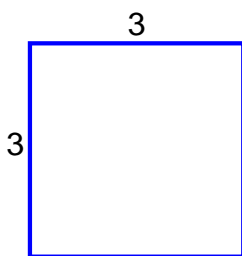
- 2 a. Find the perimeter of the rectangle.



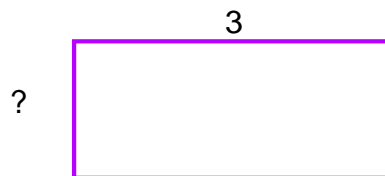
- 2 b. Find the perimeter of the rectangle.



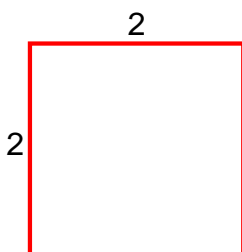
- 3 a. Find the area of the rectangle.



- 3 b. Find the missing side length, when the perimeter is 20.



- 4 a. Find the area of the square.



- 4 b. Find the area of the rectangle.

