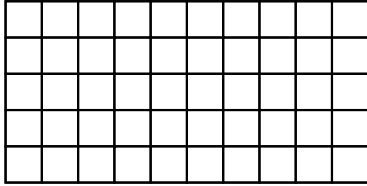
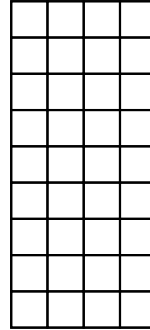


Area / Perimeter Worksheet

1 a. Find the area and perimeter of this rectangle.




1 b. Find the area and perimeter of this rectangle.




2 a. Find the area and perimeter of this square.



2 b. Find the area and perimeter of this rectangle.



3 a. Find the area and perimeter of this rectangle.



3 b. Find the area and perimeter of this rectangle.

